

1




$$2 + \quad =$$

2 4 6



$$+ =$$

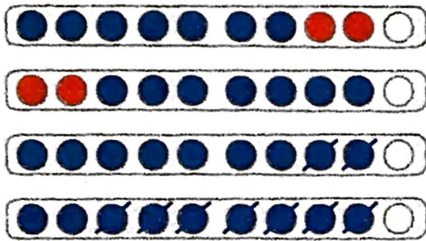


$$- =$$



$$- =$$

2



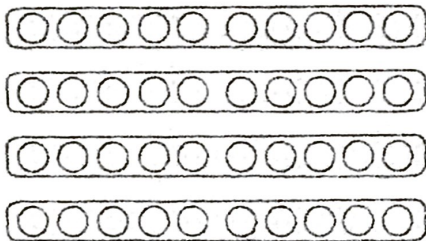
7 2 9

$$\begin{aligned} + &= \\ + &= \\ - &= \\ - &= \end{aligned}$$

3

5 1 6

$$\begin{aligned} + &= \\ + &= \\ - &= \\ - &= \end{aligned}$$



5 3 8

$$\begin{aligned} + &= \\ + &= \\ - &= \\ - &= \end{aligned}$$

4 6 10

$$\begin{aligned} + &= \\ + &= \\ - &= \\ - &= \end{aligned}$$



4 Finde die Aufgabenfamilie.

3 7

$$\begin{aligned} + &= \\ + &= \\ - &= \\ - &= \end{aligned}$$

6 2

$$\begin{aligned} + &= \\ + &= \\ - &= \\ - &= \end{aligned}$$

4 9

$$\begin{aligned} + &= \\ + &= \\ - &= \\ - &= \end{aligned}$$

8 10

$$\begin{aligned} + &= \\ + &= \\ - &= \\ - &= \end{aligned}$$